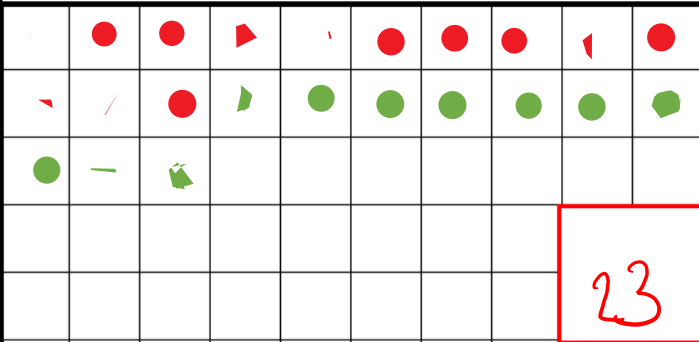


FIVE FLUENT FACTS


$\underline{\quad} + \underline{\quad} = 10$	$\underline{\quad} + \underline{\quad} = 10$	$\underline{\quad} + \underline{\quad} = 10$	$\underline{\quad} + \underline{\quad} = 10$	$\underline{\quad} + \underline{\quad} = 10$
--	--	--	--	--

PROCEDURAL PRACTICE

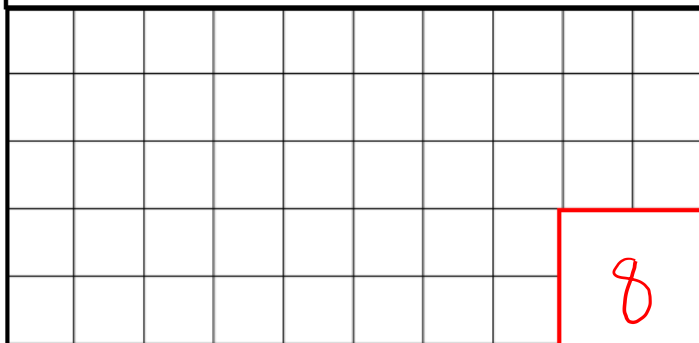
1) $13 + 10 =$



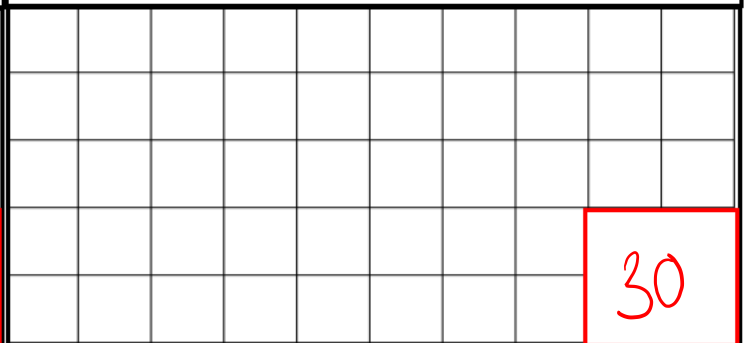
2) $4 \times 10 =$



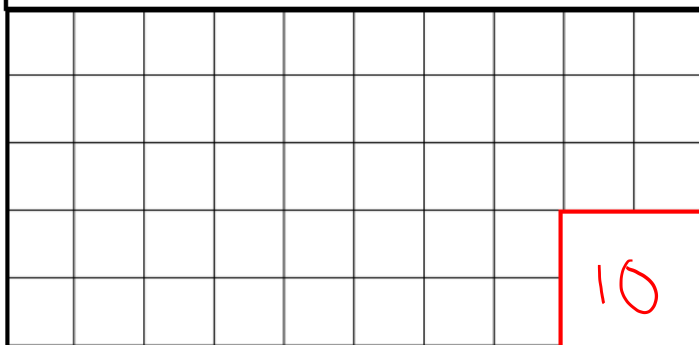
3) $10 - 2 =$




4) $20 + 10 =$



5) $20 - 10 =$



6) $10 \times 7 =$



BRAIN TEASER

Lily has 50 sequins and needs 10 more to complete her card. How many does she need altogether?

60

SHOW YOUR WORKING...

$50 + 10 = 60$