

FIVE FLUENT FACTS

Convert these 12-hour digital times into the 24-hour digital time.

1:36am → 01:36 5:12pm → 17:12 12:45am → 00:45 7:53pm → 19:53 3:34am → 03:34

PROCEDURAL PRACTICE

1. Write the time shown in words.



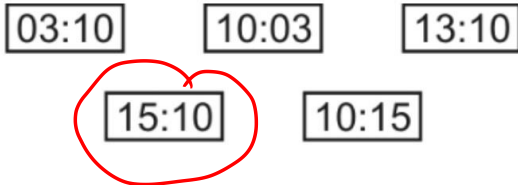
Twenty three minutes past two in the morning.

2. Write the time shown in words.




Seven minutes past eight.

3. Which clock shows ten past 3 in the afternoon?

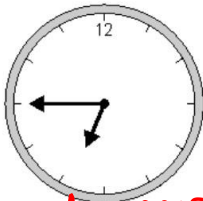


4. What is the time in words?




Seven minutes to three in the afternoon

5. Write the time shown in words.



A quarter to seven

6. Circle the two digital clocks that show this time.



BRAIN TEASER

William wants to travel to Paris by train. He needs to arrive in Paris by 5.30pm. Circle the latest time that William can leave London.

14:01

How long does it take to get to Paris if he leaves at 13:31?

3 hrs + 22 mins

Leaves London	Arrives Paris
12:01	15:22
12:25	15:56
13:31	16:53
14:01	17:26
14:31	17:53
15:31	18:53
16:01	19:20

17:30
+3hr
13:31 → 16:31
+22
16:53