

**FIVE FLUENT FACTS**

$5 \times 5 = 25$

$9 \times 5 = 45$

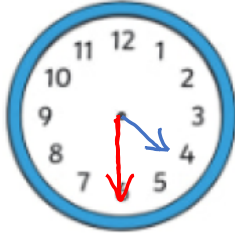
$3 \times 10 = 30$

$7 \times 5 = 35$

$2 \times 11 = 22$

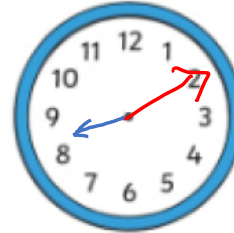
**PROCEDURAL PRACTICE**

Draw the hands on the clock to show the time.



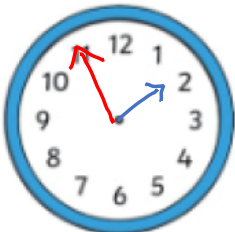
Half past 4

Draw the hands on the clock to show the time.



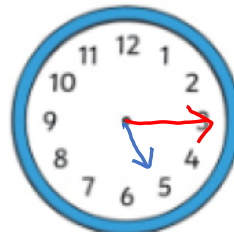
Ten past 8

Draw the hands on the clock to show the time.



Five to 2

Draw the hands on the clock to show the time.



Quarter past 5

What time is shown on the clock?



Quarter to 3

What time is shown on the clock?



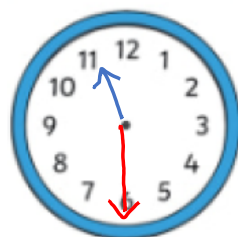
Ten to 7

**BRAIN TEASER**

Jenny's cake needs to bake for 45 minutes. If she puts it in the oven at 11:30 what time will it be ready?

12:15

SHOW YOUR WORKING...



+30      +15  
11:30      12:00      12:15